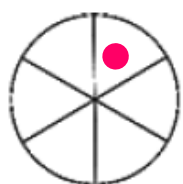
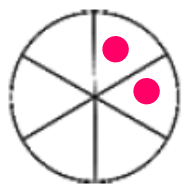


Exercice :

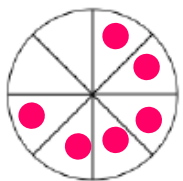
Colorie pour obtenir la fraction indiquée :



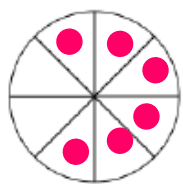
$$\frac{1}{6}$$



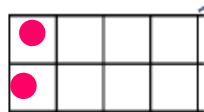
$$\frac{1}{3}$$



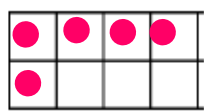
$$\frac{6}{8}$$



$$\frac{3}{4}$$



$$\frac{1}{4}$$

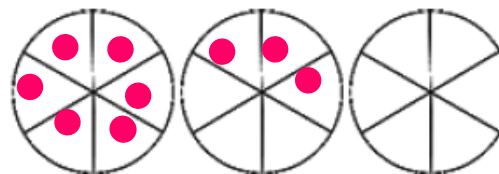


$$\frac{5}{8}$$

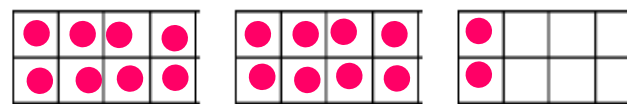
Je découpe l'unité en 4 pour avoir des quarts

Exercice :

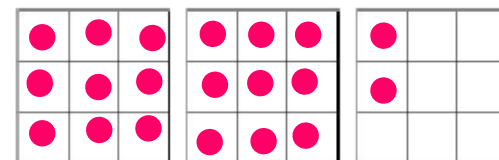
Colorie pour obtenir la fraction indiquée :



$$\frac{9}{6}$$



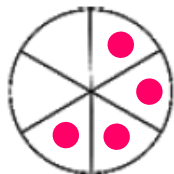
$$\frac{9}{4}$$



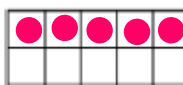
$$\frac{20}{9}$$

Exercice :

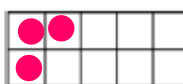
Colorie pour obtenir la fraction indiquée :



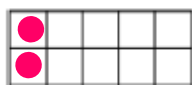
$$\frac{2}{3}$$



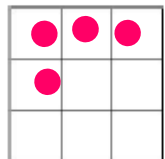
$$\frac{1}{5}$$



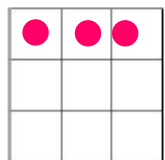
$$\frac{3}{10}$$



$$\frac{1}{2}$$



$$\frac{4}{9}$$

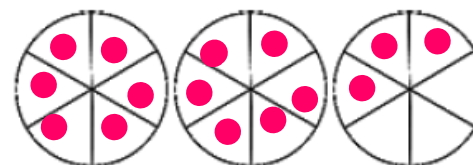


$$\frac{1}{3}$$

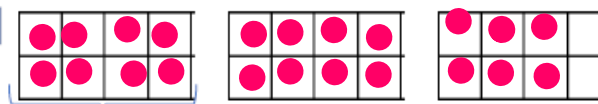
Je découpe l'unité en 4 pour avoir des quarts

Exercice :

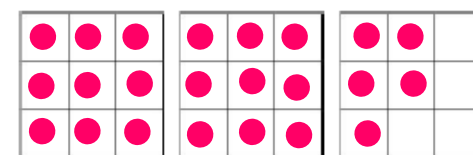
Colorie pour obtenir la fraction indiquée :



$$\frac{15}{6}$$



$$\frac{11}{4}$$



$$\frac{23}{9}$$